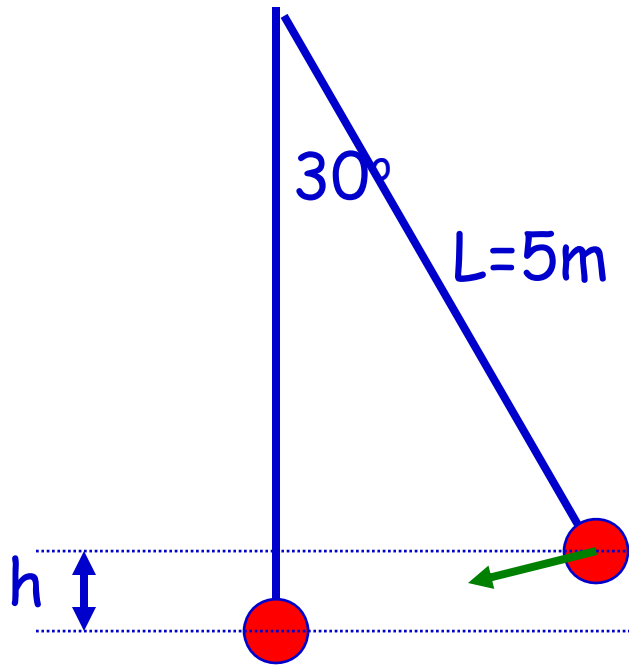


A swing



If released from rest, what is the velocity of the ball at the lowest point?

$$(PE+KE)=\text{constant}$$

$$PE_{\text{release}}=mgh \quad (h=5-5\cos(30^\circ)) \\ =6.57m \text{ J}$$

$$KE_{\text{release}}=0$$

$$PE_{\text{bottom}}=0$$

$$KE_{\text{bottom}}=\frac{1}{2}mv^2$$

$$\frac{1}{2}mv^2=6.57m \text{ so } v=3.6 \text{ m/s}$$

A running person



While running, a person dissipates about 0.60 J of mechanical energy per step per kg of body mass. If a 60 kg person develops a power of 70 Watt during a race, how fast is she running (1 step=1.5 m long)
What is the force the person exerts on the road?

$$W = F\Delta x \quad P = W/\Delta t = Fv$$


Work per step: $0.60 \text{ J/kg} * 60 \text{ kg} = 36 \text{ J}$

Work during race: $36 * (\text{racelength}(L) / \text{steplength}) = 24L$

Power = $W/\Delta t = 24L/\Delta t = 24v_{\text{average}} = 70$ so $v_{\text{average}} = 2.9 \text{ m/s}$

$F = P/v$ so $F = 24 \text{ N}$

Some examples



A tennis player receives a shot approaching him (horizontally) with 50 m/s and returns the ball in the opposite direction with 40 m/s. The mass of the ball is 0.060 kg.

A) What is the impulse delivered by the ball to the racket?

B) What is the work done by the racket on the ball?

A) Impulse=change in momentum (Δp).

$$\Delta p = m(v_{\text{final}} - v_{\text{initial}}) = 0.060(-40 - 50) = -5.4 \text{ kg m/s}$$

$$\begin{aligned} \text{B) } W &= KE_{\text{final}} - KE_{\text{initial}} = \frac{1}{2}mv_{\text{final}}^2 - \frac{1}{2}mv_{\text{initial}}^2 && \text{(no PE!)} \\ &= \frac{1}{2}0.060([-40]^2 - [50]^2) = -27 \text{ J} \end{aligned}$$

Child safety

A friend claims that it is safe to go on a car trip with your child without a child seat since he can hold onto your 12 kg child even if the car makes a frontal collision (lasting 0.05 s and causing the vehicle to stop completely) at $v=50$ km/h (about 30 miles/h). Is he to be trusted?

$F=\Delta p/\Delta t$ force=impulse per time period

$$=m(v_f-v_i)/\Delta t$$

$$v_f=0 \text{ and } v_i=50 \text{ km/h}=13.9 \text{ m/s} \quad m=12 \text{ kg} \quad \Delta t=0.05 \text{ s}$$

$$F=12(13.9)/0.05=3336 \text{ N}$$

This force corresponds to lifting a mass of 340 kg or about 680 pounds! **DON'T TRUST THIS GUY!**

Moving in space



An astronaut (100 kg) is drifting away from the spaceship with $v=0.2$ m/s. To get back he throws a wrench (2 kg) in the direction away from the ship. With what velocity does he need to throw the wrench to move with $v=0.1$ m/s towards the ship?

Initial momentum: $m_{ai}v_{ai}+m_{wi}v_{wi} = 100*0.2+2*0.2=20.4$ kg m/s

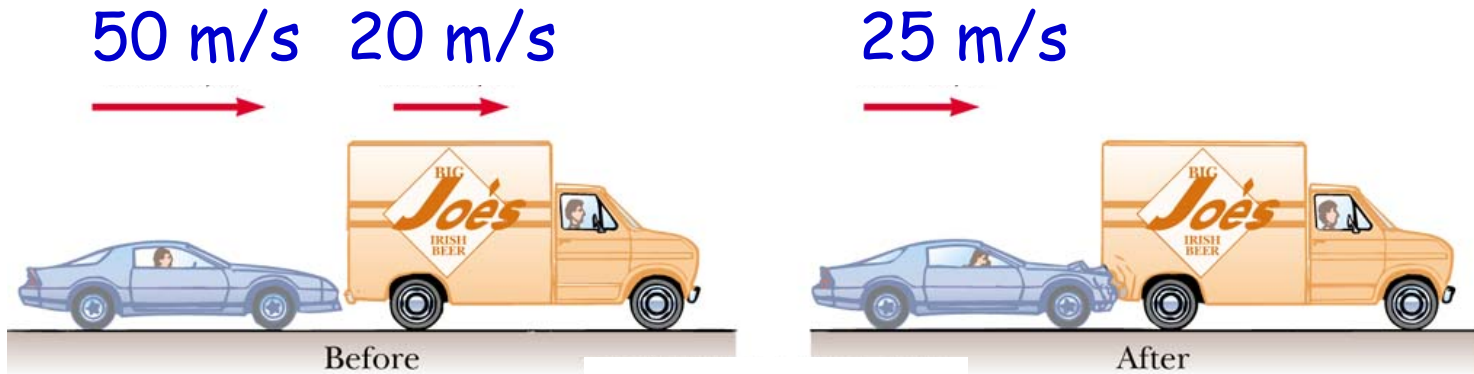
After throw: $m_{af}v_{af}+m_{wf}v_{wf}=100*(-0.1)+2*v_{wf}$ kg m/s

Conservation of momentum: $m_{ai}v_{ai}+m_{wi}v_{wi} = m_{af}v_{af}+m_{wf}v_{wf}$

$$20.4 = -10 + 2*v_{wf}$$

$$v_{wf} = 15.7 \text{ m/s}$$

Perfect inelastic collision: an example



A car collides into the back of a truck and their bumpers get stuck. What is the ratio of the mass of the truck and the car? ($m_{\text{truck}} = c \cdot m_{\text{car}}$) What is the fraction of KE lost?

$$m_1 v_{1i} + m_2 v_{2i} = v_f (m_1 + m_2) \quad 50m_c + 20c \cdot m_c = 25(m_c + c \cdot m_c)$$

$$\text{so } c = 25m_c / 5m_c = 5$$

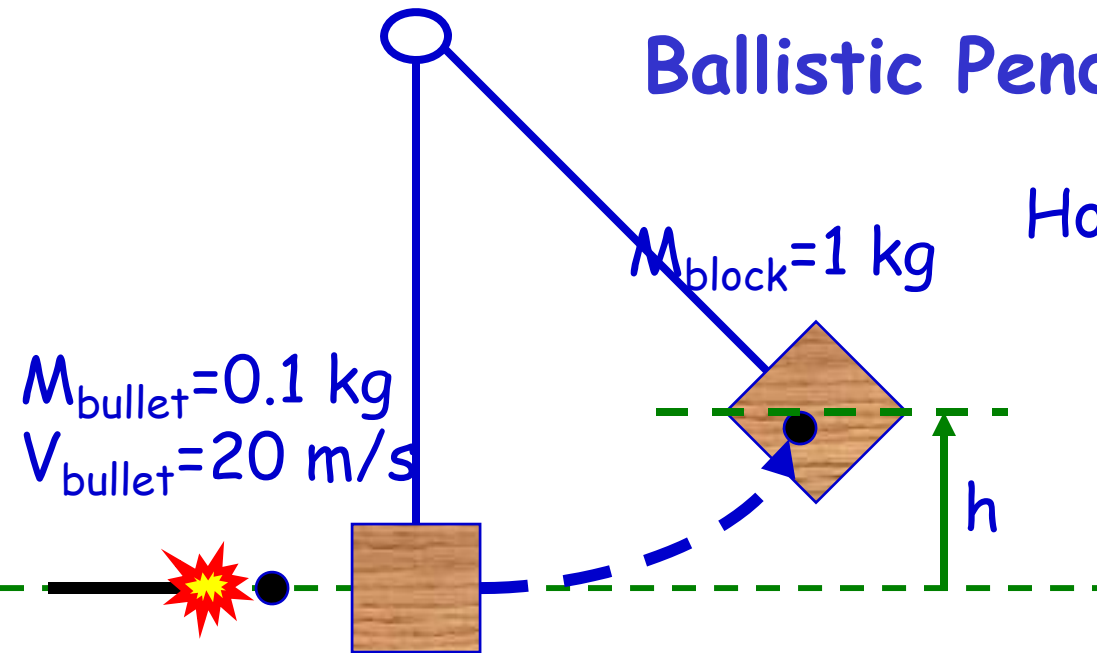
$$\text{Before collision: } KE_i = \frac{1}{2} m_c 50^2 + \frac{1}{2} 5m_c 20^2$$

$$\text{After collision: } KE_f = \frac{1}{2} 6m_c 25^2$$

$$\text{Ratio: } KE_f / KE_i = (6 \cdot 25^2) / (50^2 + 5 \cdot 20^2) = 0.83$$

17% of the KE is lost (damage to cars!)

Ballistic Pendulum



How high will the block go?

There are 2 stages:

- The collision
- The swing of the block

The collision The bullet gets stuck in the block (perfect inelastic collision). Use conservation of momentum.

$$m_1 v_{1i} + m_2 v_{2i} = v_f (m_1 + m_2) \text{ so: } 0.1 * 20 + 1 * 0 = v_f (0.1 + 1) \quad v_f = 1.8 \text{ m/s}$$

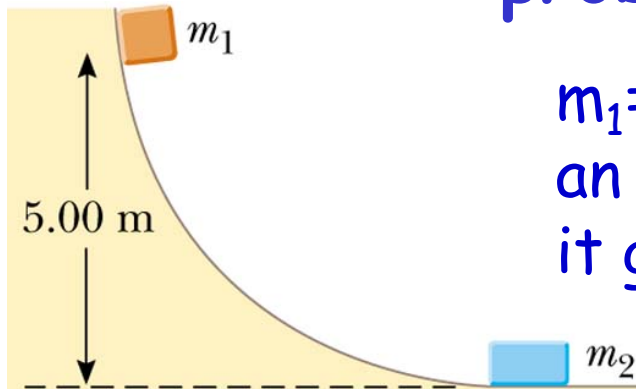
The swing of the block Use conservation of mechanical energy.

$$(mgh + \frac{1}{2}mv^2)_{\text{start of swing}} = (mgh + \frac{1}{2}mv^2)_{\text{at highest point}}$$

$$0 + \frac{1}{2} * 1.1 * (1.8)^2 = 1.1 * 9.81 * h \text{ so } h = 0.17 \text{ m}$$

Why can't we use conservation of ME right from the start??

problem



$m_1=5$ kg $m_2=10$ kg. m_1 slides down and makes an elastic collision with m_2 . How high does it go back up?

Step 1. What is the velocity of m_1 just before it hits m_2 ?

Conservation of ME: $(m_1gh+0.5mv^2)_{\text{start}}=(m_1gh+0.5mv^2)_{\text{bottom}}$

$$5*9.81*5+0=0+0.5*5*v^2 \quad \text{so } v_{1i}=9.9 \text{ m/s}$$

Step 2. Collision: Elastic so conservation of momentum **AND** KE.

$$\bullet m_1v_{1i}+m_2v_{2i}=m_1v_{1f}+m_2v_{2f} \Rightarrow 5*9.9+0=5*v_{1f}+10v_{2f} \Rightarrow v_{2f}=4.95-0.5*v_{1f}$$

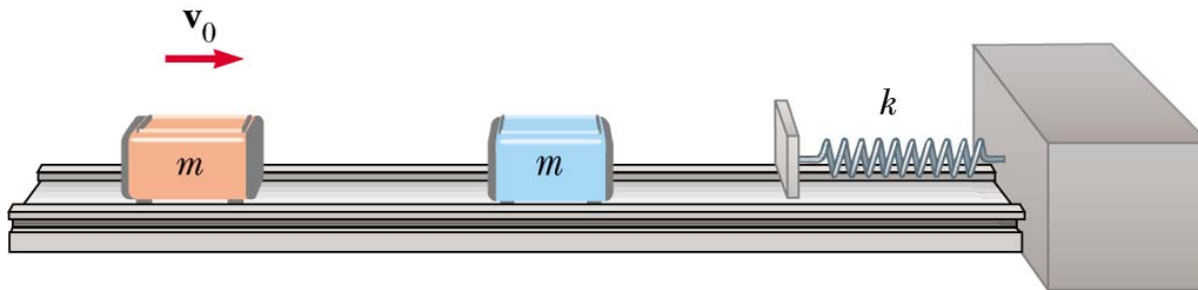
$$\bullet (v_{1i}-v_{2i})=(v_{2f}-v_{1f}) \Rightarrow 9.9-0=v_{2f}-v_{1f} \Rightarrow \frac{v_{2f}}{v_{1f}}=\frac{9.9+v_{1f}}{-4.95-1.5v_{1f}}$$
$$v_{1f}=-3.3\text{m/s} \leftarrow 0$$

Step 3. m_1 moves back up; use conservation of ME again.

$$(m_1gh+0.5mv^2)_{\text{bottom}}=(m_1gh+0.5mv^2)_{\text{final}}$$

$$0 + 0.5*5*(-3.3)^2 = 5*9.81*h + 0 \quad h=0.55 \text{ m}$$

Carts on a spring track



$$k=50 \text{ N/m}$$

$$v_0=5.0 \text{ m/s}$$

$$m=0.25 \text{ kg}$$

What is the maximum compression of the spring if the carts collide a) elastically and b) inelastically?

A) Conservation of momentum and KE

$$m_1 v_{1i} + m_2 v_{2i} = m_1 v_{1f} + m_2 v_{2f} \Rightarrow 0.25 \cdot 5 = 0.25 v_{1f} + 0.25 v_{2f} \Rightarrow v_{1f} = 5 - v_{2f}$$

$$(v_{1i} - v_{2i}) = (v_{2f} - v_{1f}) \Rightarrow 5 = v_{2f} - v_{1f} \quad v_{1f} = 0 \quad v_{2f} = 5 \text{ m/s}$$

$$\text{Conservation of energy: } \frac{1}{2} m v^2 = \frac{1}{2} k x^2 \quad 0.5 \cdot 0.25 \cdot 5^2 = 0.5 \cdot 50 x^2$$

$$x = 0.35 \text{ m}$$

We could have skipped collision part!!

B) Conservation of momentum only

$$m_1 v_{1i} + m_2 v_{2i} = (m_1 + m_2) v_f \Rightarrow 0.25 \cdot 5 = 0.5 v_f \Rightarrow v_f = 2.5 \text{ m/s}$$

$$\text{Conservation of energy: } \frac{1}{2} m v^2 = \frac{1}{2} k x^2 \quad 0.5 \cdot 0.5 \cdot 2.5^2 = 0.5 \cdot 50 x^2$$

$$x = 0.25 \text{ m}$$

Part of energy is lost!

Impact of a meteorite

Estimate what happens if a 1 km radius meteorite collides with earth: a) Is the orbit of earth around the sun changed?

b) how much energy is released?

Assume: meteorite has same density as earth, the collision is inelastic and the meteorites v is 10 km/s (relative to earth)

A) Earth's mass: $6E+24$ kg radius: $6E+6$ m

density=mass/volume= $M/(4 \pi r^3/3)=6.6E+3$ kg/m³

mass meteorite: $4(1000)^3/3\pi*6.6E+3=2.8E+13$ kg

Conservation of momentum: $m_e v_e + m_m v_m = (m_e + m_m) v_{me}$

$(2.8E+13)(1E+4)=(6E+24)v_{me}$ so $v_{me}=4.7E-08$ m/s (no change)

B) Energy=Kinetic energy loss: $(\frac{1}{2}m_e v_e^2 + \frac{1}{2}m_m v_m^2) - (\frac{1}{2}m_{m+e} v_{me}^2)$

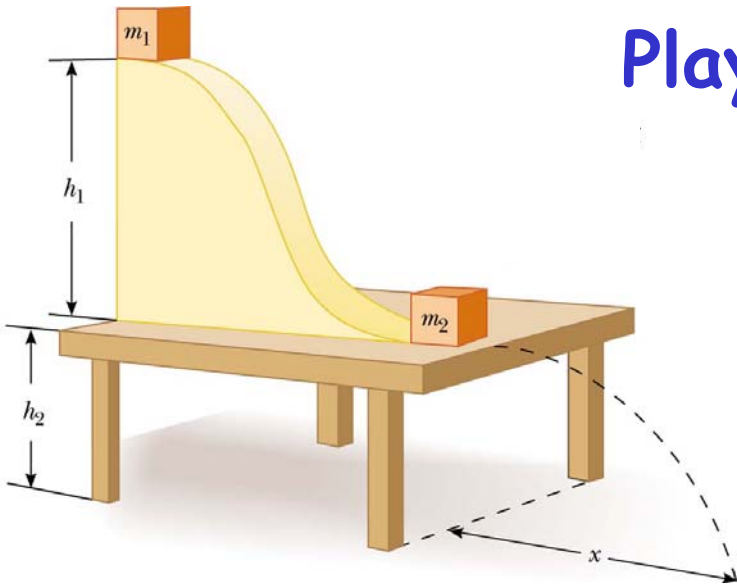
$0.5(2.8E+13)(1E+4)^2 - 0.5(6E+24)(4.7E-08)^2 = 1.4E+21$ J

Largest nuclear bomb existing: 100 megaton TNT= $4.2E+17$ J

Energy release: $3.3E+3$ nuclear bombs!!!!



Playing with blocks



$m_1=0.5$ kg collision is elastic

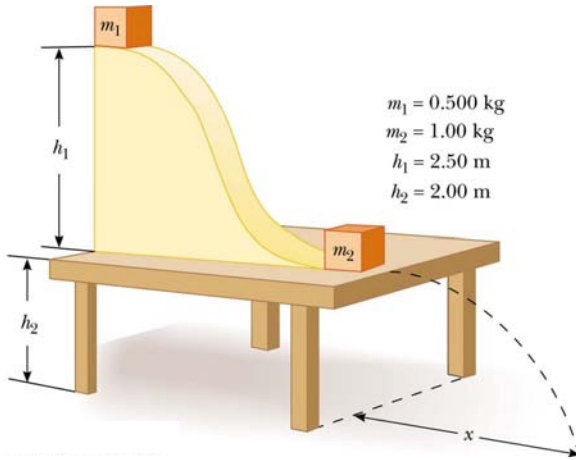
$m_2=1.0$ kg

$h_1=2.5$ m

$h_2=2.0$ m

- determine the velocity of the blocks after the collision
- how far back up the track does m_1 travel?
- how far away from the bottom of the table does m_2 land
- how far away from the bottom of the table does m_1 land

Determine the velocity of the blocks after the collision



$m_1 = 0.5 \text{ kg}$ collision is elastic

$m_2 = 1.0 \text{ kg}$

$h_1 = 2.5 \text{ m}$

$h_2 = 2.0 \text{ m}$

Step 1: determine velocity of m_1 at the bottom of the slide

Conservation of ME $(mgh + \frac{1}{2}mv^2)_{\text{top}} = (mgh + \frac{1}{2}mv^2)_{\text{bottom}}$

$$0.5 * 9.81 * 2.5 + 0 = 0 + 0.5 * 0.5 * v^2$$

$$\text{so: } v_1 = 7.0 \text{ m/s}$$

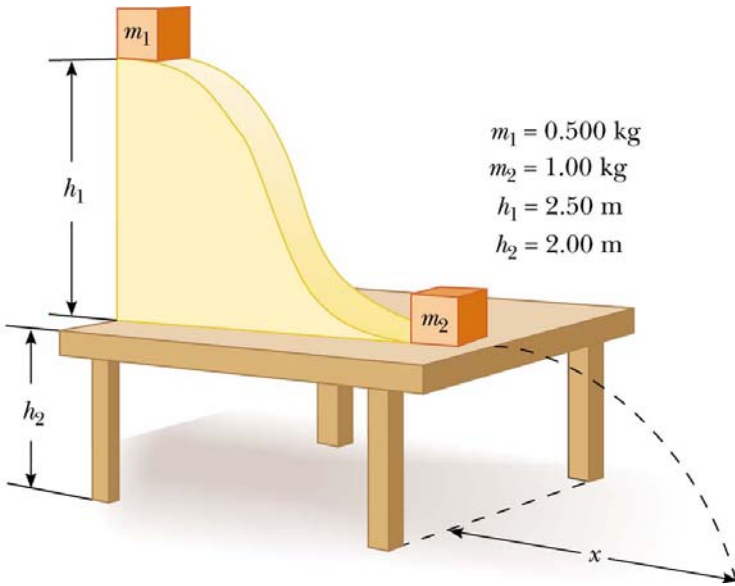
Step 2: Conservation of momentum and KE in elastic collision

$$m_1 v_{1i} + m_2 v_{2i} = m_1 v_{1f} + m_2 v_{2f} \text{ so } 0.5 * 7 + 0 = 0.5 v_{1f} + v_{2f}$$

$$(v_{1i} - v_{2i}) = (v_{2f} - v_{1f}) \text{ so } 7.0 - 0 = v_{2f} - v_{1f}$$

Combine these equations and find: $v_{1f} = -2.3 \text{ m/s}$ $v_{2f} = 4.7 \text{ m/s}$

How far back up does m_1 go after the collision?



$m_1 = 0.5 \text{ kg}$ collision is elastic

$m_2 = 1.0 \text{ kg}$

$h_1 = 2.5 \text{ m}$

$h_2 = 2.0 \text{ m}$

$v_{1f} = -2.3 \text{ m/s}$ $v_{2f} = 4.7 \text{ m/s}$

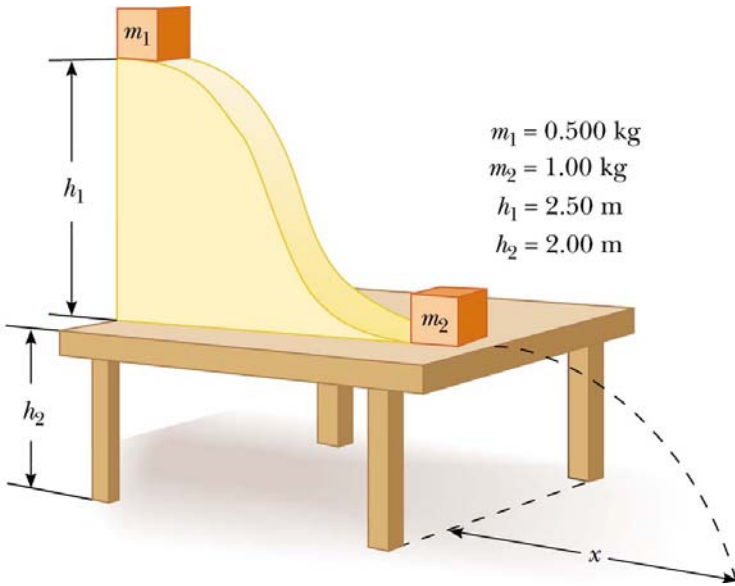
Use conservation of ME:

$$(mgh + \frac{1}{2}mv^2)_{\text{bottom}} = (mgh + \frac{1}{2}mv^2)_{\text{back up slide}}$$

$$0 + 0.5 * 0.5 * (-2.3)^2 = 0.5 * 9.81 * h + 0$$

$$h = 0.27 \text{ m}$$

How far away from the table does m_2 land?



$m_1 = 0.5 \text{ kg}$ collision is elastic

$m_2 = 1.0 \text{ kg}$

$h_1 = 2.5 \text{ m}$

$h_2 = 2.0 \text{ m}$

$v_{1f} = -2.3 \text{ m/s}$ $v_{2f} = 4.7 \text{ m/s}$

$h_1 = 0.27 \text{ m}$ (after collision back up)

This is a parabolic motion with initial horizontal velocity.

Horizontal

$$x(t) = x(0) + v_x(0)t + \frac{1}{2}at^2$$

$$x(t) = 4.7t$$

$$x(0.63) = 2.96 \text{ m}$$

vertical

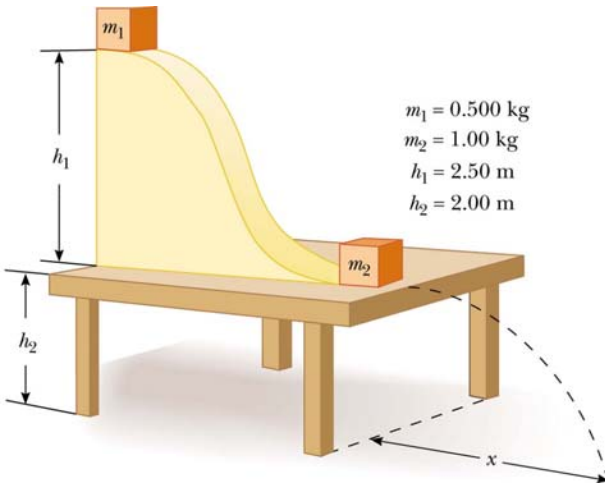
$$y(t) = y(0) + v_y(0)t - \frac{1}{2}gt^2$$

$$0 = 2.0 - 0.5 * 9.81 * t^2$$

$$t = 0.63 \text{ s}$$



How far away from the table does m_1 land?



$m_1 = 0.5 \text{ kg}$ collision is elastic

$m_2 = 1.0 \text{ kg}$

$h_1 = 2.5 \text{ m}$

$h_2 = 2.0 \text{ m}$

$v_{1f} = -2.3 \text{ m/s}$ $v_{2f} = 4.7 \text{ m/s}$

$h_1 = 0.27 \text{ m}$ (after collision back up)

$x_2 = 2.96 \text{ m}$

Use conservation of ME: m_1 has $-v_{1f} = 2.3 \text{ m/s}$ when it returns back at the bottom of the slide.

This is a parabolic motion with initial horizontal velocity.

Horizontal

$$x(t) = x(0) + v_x(0)t + \frac{1}{2}at^2$$

$$x(t) = 2.3t$$

$$x_1(0.63) = 1.45 \text{ m}$$

vertical

$$y(t) = y(0) + v_y(0)t - \frac{1}{2}gt^2$$

$$0 = 2.0 - 0.5 * 9.81 * t^2$$

$$t = 0.63 \text{ s}$$

Ballistic balls

Consider only the lowest ball first.

$$X(t) = 1.5 - 0.5 \cdot 9.8 \cdot t^2 = 0 \quad \text{so } t = 0.55 \text{ s}$$

$$V(t) = -9.8t \quad \text{so } V(0.55) = -5.4 \text{ m/s}$$

Collision with earth:

$$\bullet m_2 v_{2i} = m_1 v_{1f} + m_2 v_{2f} \quad (1: \text{ earth } 2: \text{ ball})$$

$$\bullet v_{2i} = v_{2f} - v_{1f}$$

$$v_{2f} = (m_2 - m_1) v_{2i} / (m_1 + m_2) \quad m_1 \gg m_2 \quad \text{so } v_{2f} = -v_{2i} = 5.4 \text{ m/s}$$

Consider the collision of ball $m (= n+1)$ with ball n

$$\bullet m_n v_{ni} + m_m v_{mi} = m_n v_{nf} + m_m v_{mf}$$

$$\bullet (v_{ni} - v_{mi}) = (v_{nf} - v_{mf})$$

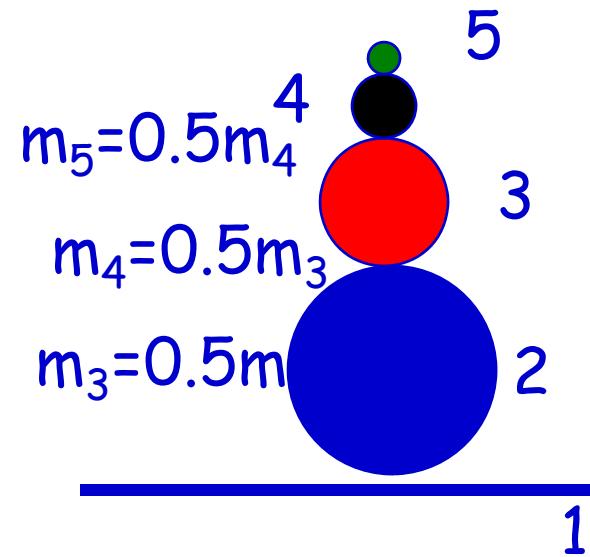
$$v_{mf} = [2m_n v_{ni} + (m_m - m_n) v_{mi}] / [m_n + m_m] \quad \& \quad m_m = 0.5 m_n$$

$$\text{so } v_{mf} = [2m_n v_{ni} - 0.5 m_n v_{mi}] / [1.5 m_n] = [1.33 v_{ni} - 0.33 v_{mi}]$$

$$\bullet v_{3f} = 1.33 \cdot 5.4 - 0.33(-5.4) = 9.0 \text{ m/s}$$

$$\bullet v_{4f} = 1.33 \cdot 9.0 - 0.33(-5.4) = 13.7 \text{ m/s}$$

$$\bullet v_{5f} = 1.33 \cdot 13.7 - 0.33(-5.4) = 20. \text{ m/s}$$



Ballistic balls II

Highest point:

$$v(t) = 20. - 9.8t = 0 \text{ so } t = 2.0 \text{ s}$$

$$x(t) = 20t - 0.5 * 9.8 * 2.0^2 = 20. \text{ m !!!}$$

